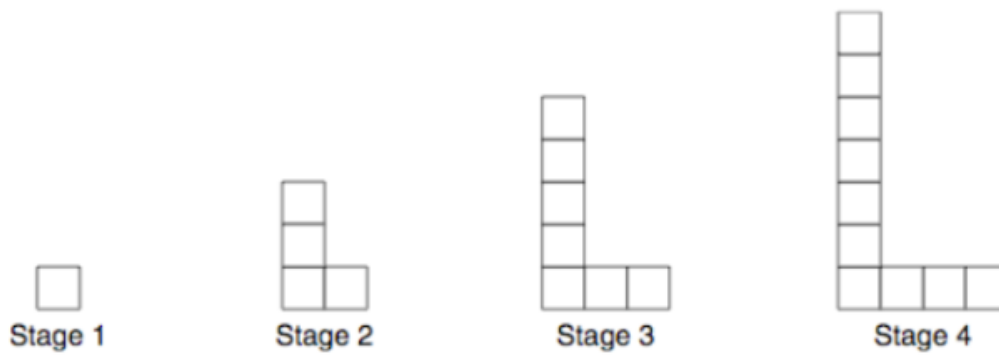


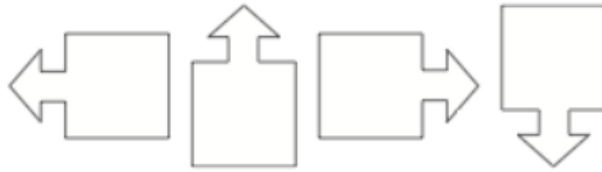
9 Ms. Lewis has 50 blocks. She uses 22 of these blocks to make the pattern shown below.



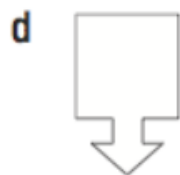
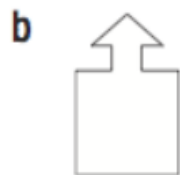
How many stages will Ms. Lewis be able to complete with the 50 blocks?

Justify your answer.

**20** The 4 arrows below repeat in this order to make a pattern.



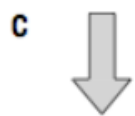
Which arrow is the 74<sup>th</sup> term?



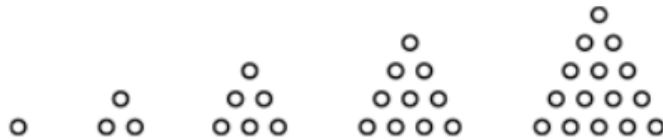
**24** A repeating pattern is shown below.



What is the 16<sup>th</sup> figure in the pattern?



**6** Consider the five terms in the following pattern.



If the pattern continues in the same way, how many circles will be in the seventh term?

- a 21
- b 25
- c 28
- d 36

**14** Which rule describes the following pattern?

1, 2, 4, 8

- a Start with 1 and add 1 to find the next term.
- b Start with 1 and add 2 to find the next term.
- c Start with 1 and divide by 2 to find the next term.
- d Start with 1 and multiply by 2 to find the next term.