

# Patterns



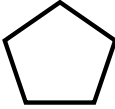
Find the next 3 terms in each pattern:

1) 3,6,9,12,3,6, \_\_\_\_\_


2) 25,22,29,26,33, \_\_\_\_\_

3) 20,60,30,90,45 \_\_\_\_\_

4) 3000, 2750, 2500, 2250, 2200 \_\_\_\_\_

5)    \_\_\_\_\_

6) 25,22,29,26,33, \_\_\_\_\_

7)      \_\_\_\_\_

