

1) 3,6,9,12,3,6, _____

The next 3 terms are : 9,12,3

A repeating pattern with a core of 4 terms.

2) 25,22,29,26,33, _____

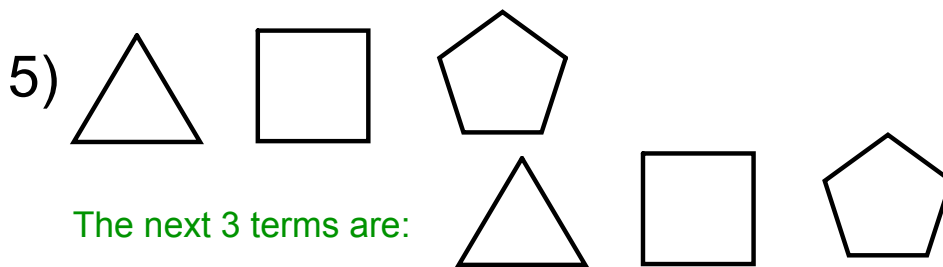
The next 3 terms are : 30,37,34

An alternating, 2 step, growing pattern.

3)20,60,30,90,45 _____

The next 3 terms are : 135, 67.5, 202.5

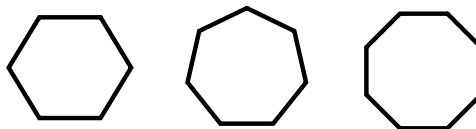
A growing pattern, multiply by 3 and then divide by 2.




The next 3 terms are:

It could be a repeating pattern

The next 3 terms are:



It could be a pattern where, to find the next term, you take the previous term and add one more side to the shape.

7)  Smiley
dude Flower

The next 3 terms in the repeating pattern.